



Area Model Division Worksheet (No Remainders)

1. $26 \div 2 =$




Quotient= _____

2. $38 \div 2 =$



Quotient= _____

3. $46 \div 2 =$



Quotient= _____

4. $39 \div 3 =$



Quotient= _____

5. $57 \div 3 =$




Quotient= _____

6. $66 \div 3 =$




Quotient= _____

7. $52 \div 4 =$




Quotient= _____

8. $76 \div 4 =$




Quotient= _____

9. $92 \div 4 =$




Quotient= _____

10. $65 \div 5 =$




Quotient= _____

11. $95 \div 5 =$




Quotient= _____

12. $125 \div 5 =$




Quotient= _____

13. $78 \div 6 =$




Quotient= _____

14. $114 \div 6 =$



Quotient= _____

15. $132 \div 6 =$



Quotient= _____