


Area Model Multiplication Decimals VIII 5th Grade - (5.NBT.B.7)

1. $0.2 \times 0.5 =$


Estimate \approx



Product = _____

2. $0.4 \times 0.5 =$


Estimate \approx



Product = _____

3. $0.1 \times 0.6 =$


Estimate \approx



Product = _____

4. $0.5 \times 0.6 =$

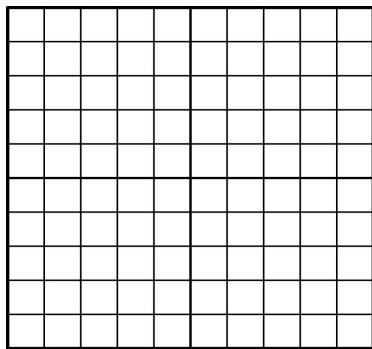
Estimate \approx



Product = _____

5. $0.1 \times 0.7 =$


Estimate \approx



Product = _____

6. $0.5 \times 0.7 =$

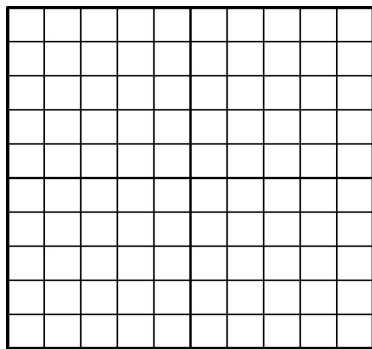
Estimate \approx



Product = _____

7. $0.2 \times 0.8 =$


Estimate \approx



Product = _____

8. $0.3 \times 0.9 =$

Estimate \approx



Product = _____